

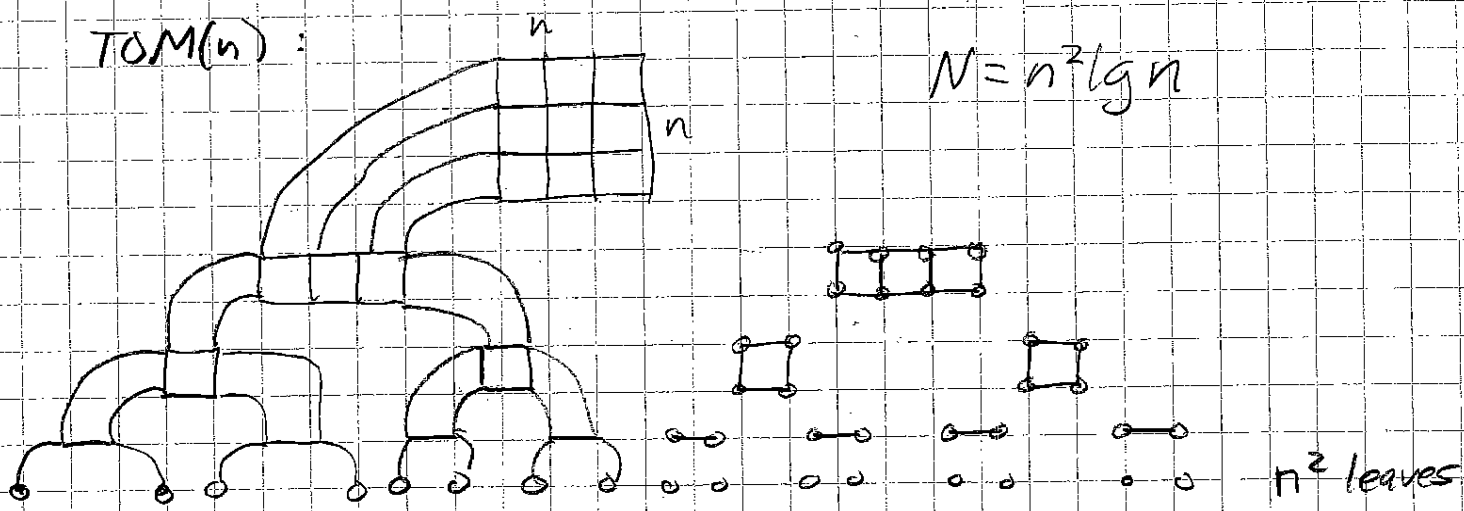
6.896
4/28/04
L20.1

General Layout Strategy

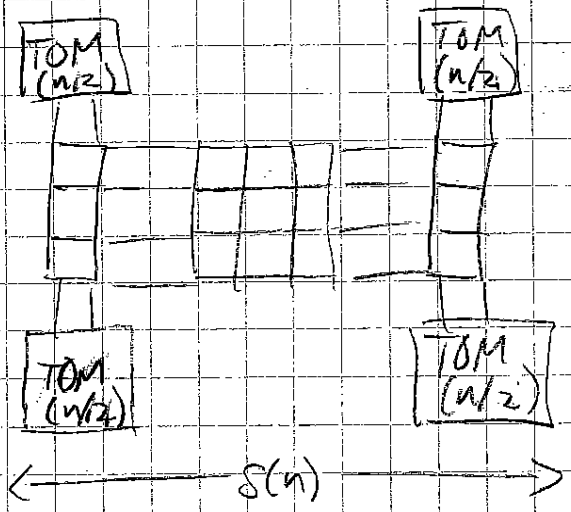
Tree of meshes (not mesh of trees)

TOM(n) :

$N = n^2 \lg n$



Area:



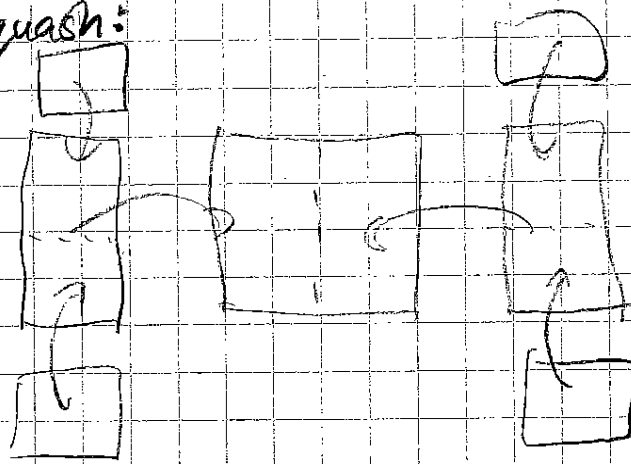
$$S(n) = 2S(n/2) + n$$

$$= \Theta(n \lg n)$$

$$A(n) = \Theta(n^2 \lg^2 n)$$

6.896
4/28/04
L20.2

Fold and squash:



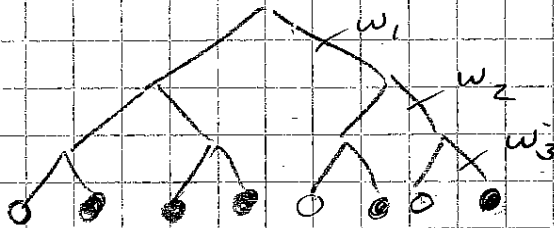
$n^2 \times \lg n$ layers $\xrightarrow{\text{squash}} \Theta(n^2 \lg^2 n)$ area.

Truncated TOM: $\text{TOM}(n, k)$ - top k levels.
Area = $\Theta(n^2 k^2)$

Decomposition trees

T is a $\langle w_1, w_2, \dots, w_r \rangle$ decomposition tree for $G = (V, E)$:

1. Vertices in V mapped to leaves of T .
2. Edges in E run through links of T .
3. #edges leaving subtree rooted at depth i is $\leq w_i$



For $1 < \alpha \leq 2$, G has a (w, α) decomp tree if it has a $\langle w, w/\alpha, w/\alpha^2, \dots, O(1) \rangle$ decomp tree.

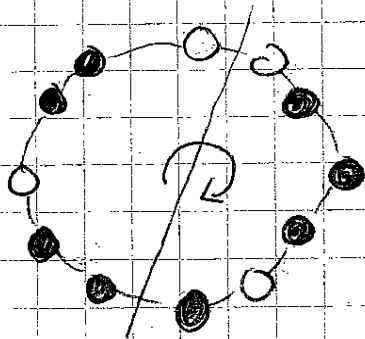
A decomp tree is balanced if all subgraphs at the same depth have same # vertices to within 1.

6.896
4/28/04
L20.3Layout strategy

1. Start with (w, \sqrt{z}) decomp tree.
2. Balance the decomp tree
3. Embed the balanced tree in trunc TOM
4. Use trunc TOM layout to yield $O(w^2 \lg^2 n)$ area layout.

Balancing decomp trees

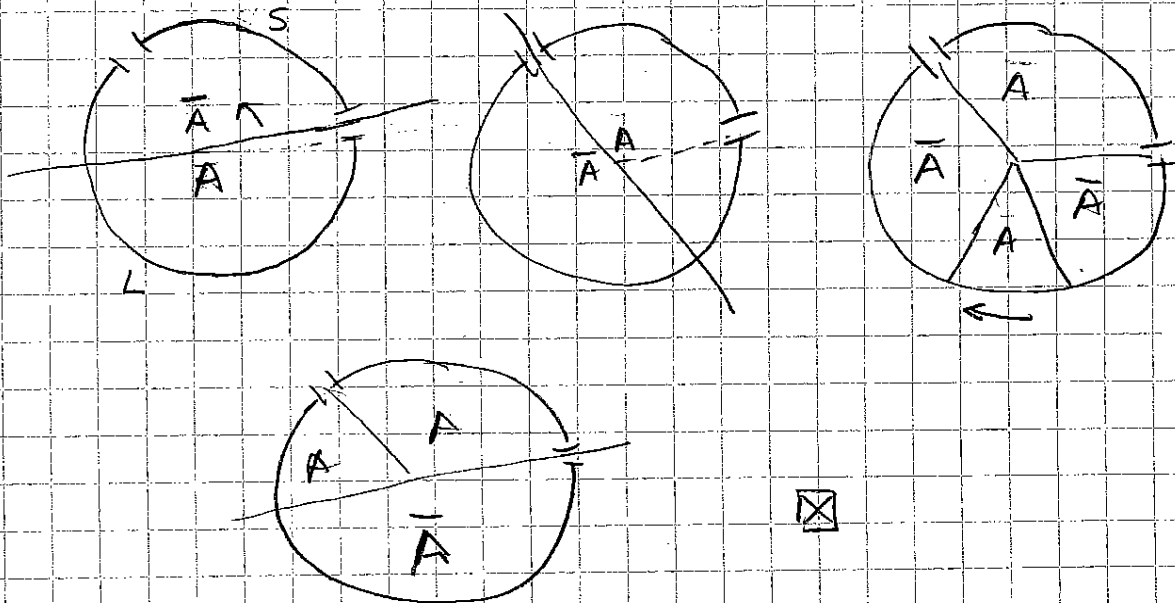
Warm-up: Necklace with black and white pearls.
How many cuts to divide into 2 sets, each with half the pearls of each color?



2 cuts suffice.
Continuity argument.

Lemma. Consider any 2 strings composed of an even # of black pearls and an even # of white pearls. By making at most 2 cuts, the pearls can be partitioned into 2 sets, each containing 2 strings, such that each set has $1/2$ the pearls of each color.

Pf. (Continuity arg.)

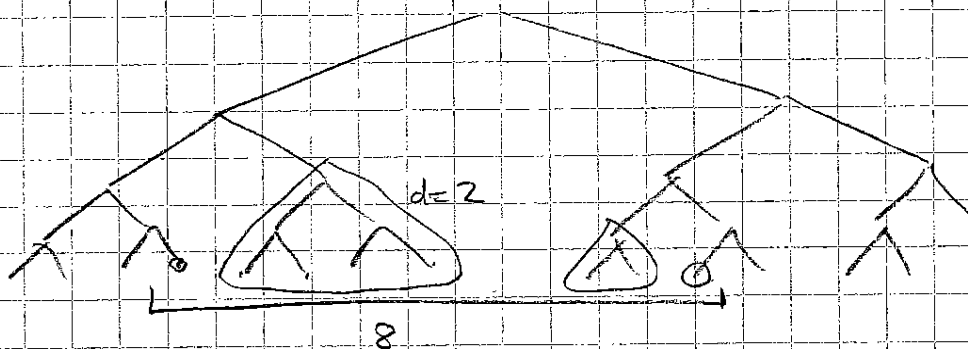


□

6.896
4/28/04
LZO.Y

Lemma. Let T be cbt drawn with n leaves on a straight line, and consider any set S of k consecutive leaves of T . Then, \exists a forest F of complete binary subtrees of T $\$$

1. $S = \{\text{leaves of } F\}$
2. at most 2 trees of F have any given height.
3. depth of largest tree in F is $\leq \lg k$.

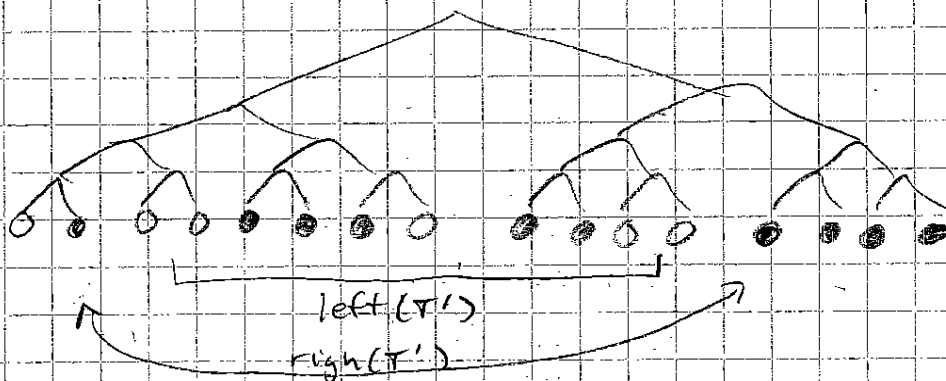


Pf. F be forest of maximal cbt's whose leaves lie only in S . (1) & (3) follow. Use induction to prove (2). \square

Thm. Let G be a graph on n vertices that has a $\langle w_1, w_2, \dots, w_r \rangle$ decomp. tree T . Then, G has a $\langle w'_1, w'_2, \dots, w'_r \rangle$ balanced decomp. tree T' , where

$$w'_i = 4 \sum_{k=i}^r w_k.$$

Pf. Color leaves of T : 1 = node of G , 0 = empty.



Recursively split B & W leaves evenly. Each stage has ≤ 2 strings of consec. leaves from T , each of which has ≤ 2 cbt's of a given height.

6.896
4/28/04
L20.5

Total # wires leaving a string
 \leq sum of wires leaving each of its cbt's.

$$w_i' \leq 4 \sum_{k=i}^r w_k. \quad \square$$

Corollary A graph with a (w, α) decomp tree, α const,
 has an $(O(w), \alpha)$ balanced decomp tree.

Pf. Sum is geometric:

$$w_i' = 4 \sum_{k=i}^r w_k$$

$$\leq 4 \sum_{k=i}^r \frac{w}{\alpha^{k-i}}$$

$$\leq \frac{4w}{\alpha^{i-1}} \left(\frac{\alpha}{\alpha-1} \right).$$

Graph has $(4w\alpha/(\alpha-1), \alpha)$ decomp tree. \square

Next week: Embed in frunc TOM \Rightarrow layout.
 Area-universal networks.

<<Exam issues>>