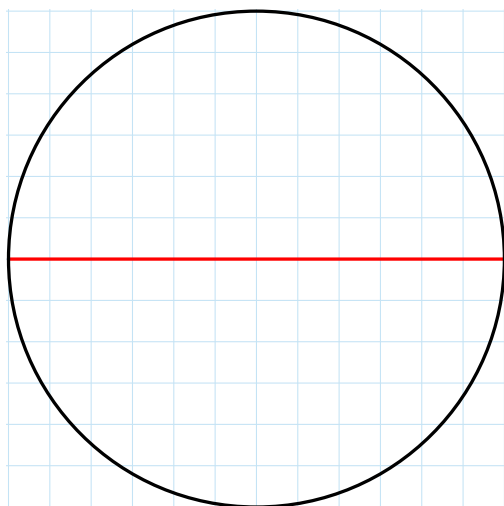


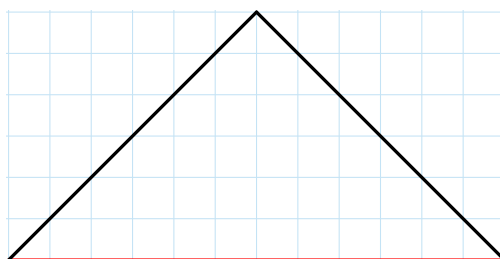
**Problem Set 9**

*Due: Tuesday, April 15, 2025 at 10am*

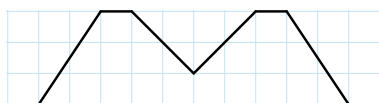
**Problem 9.1 [Slenderness].** For each of the following linkage adornments (where the red segment is the *base*, i.e., underlying bar of the linkage), is it slender?



(a)




(b)



(c)



(d)



(e)